

THE VILLAGE INTERNATIONAL SCHOOL

Question Bank

Subject: Mathematics

Chapter 1: Shapes and Maps

1. Identify the shape in the object:

ANS: Triangle

2. A square has edges.

ANS: 4

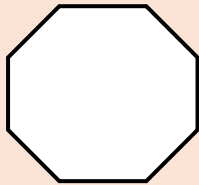
3. A circle has corners.

ANS: 0

4. A circle has edges.

ANS: 1

5. How many edges and corners does the following figure have?



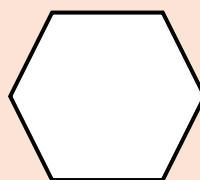
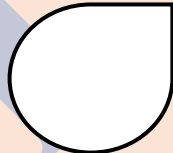
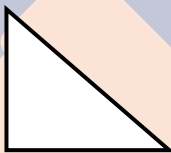
ANS: Edges = 8

Corners = 8

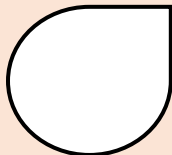
6. What is the name of the line joining two opposite corners of a shape.

ANS: Diagonal

7. Which of the following figure **does not** tile with itself?



ANS:



8.

Tick the pictures of 3D objects.

1.




2.



3.



4.



5.

